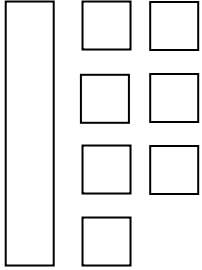


Name: _____

Tens and Ones

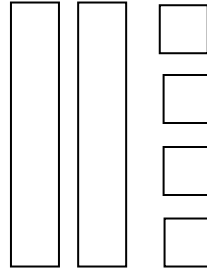
Write how many tens and ones. Then write the number.

1.)



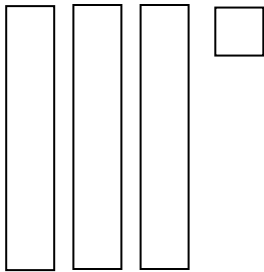
Tens	Ones

2.)



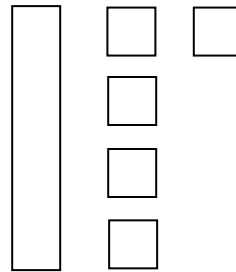
Tens	Ones

3.)



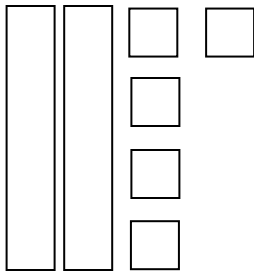
Tens	Ones

4.)



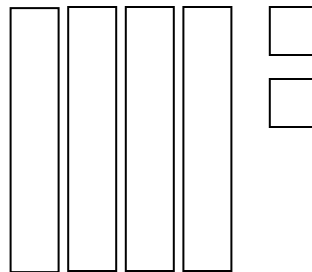
Tens	Ones

5.)



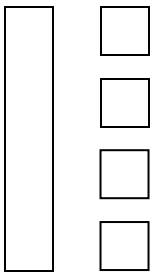
Tens	Ones

6.)



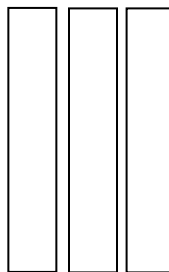
Tens	Ones

7.)



Tens	Ones

8.)



Tens	Ones
