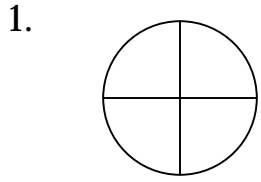


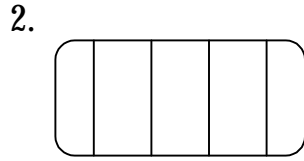
Name: _____

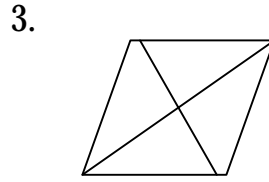
Date: _____

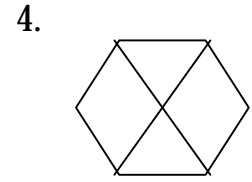
Fractions: Fourths and Fifths

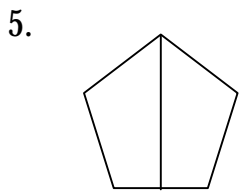
What are the fractions for these shapes?




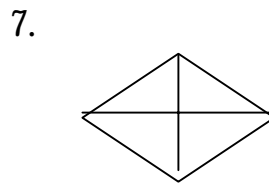


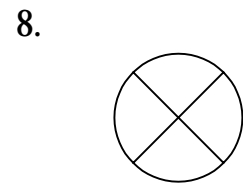




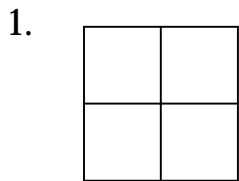




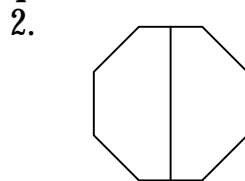




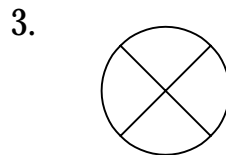
Shade in the fractional parts.




$\frac{2}{4}$



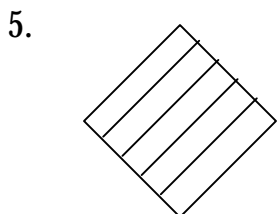
$\frac{1}{2}$



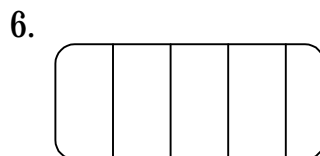
$\frac{3}{4}$



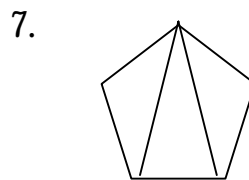
$\frac{2}{5}$



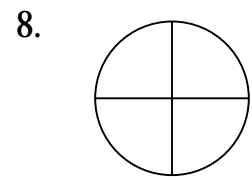
$\frac{1}{5}$



$\frac{3}{5}$



$\frac{1}{3}$



$\frac{1}{4}$

Directions for teachers:

- For the first part of the worksheet, shade in the parts with a pencil or pen.
- Then photocopy.