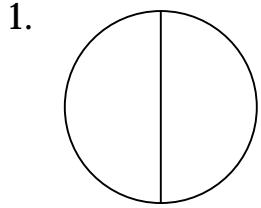


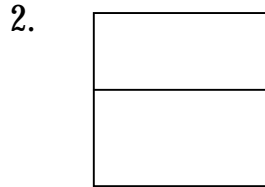
Name: _____

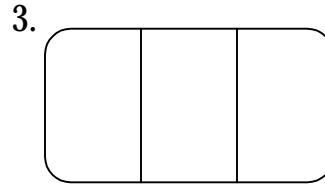
Date: _____


Fractions: Halves and Thirds

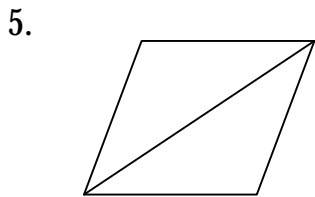
Directions: Write the fraction for each picture.

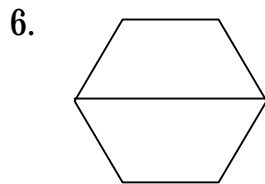


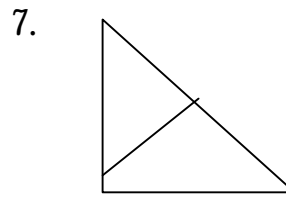


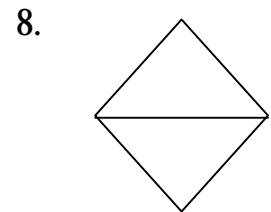




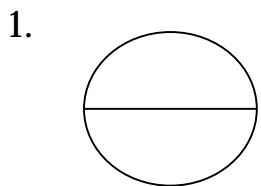




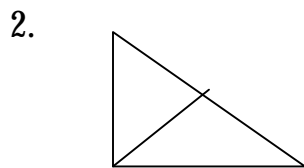




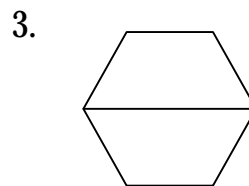
Directions: Shade in the fractional parts.




$\frac{1}{2}$



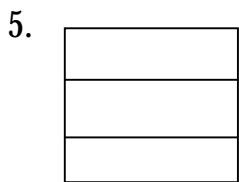
$\frac{2}{2}$



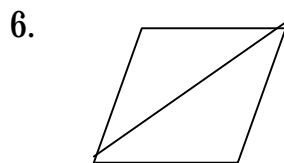
$\frac{1}{2}$




$\frac{2}{2}$



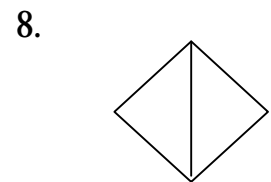
$\frac{1}{3}$



$\frac{1}{2}$



$\frac{2}{3}$



$\frac{2}{2}$

Directions for teachers:

- For the first part of the worksheet, shade in the parts with a pencil or pen.
- Then photocopy.